

Welcome to Second Grade!


My name is Mrs. Botelho, and I'm looking forward to being your child's teacher. This summer before entering 2nd grade I would like your child to read *Freckle Juice* by Judy Blume. After reading the book, please have your child complete the worksheets and be ready to discuss their favorite part.

In addition to reading *Freckle Juice*, please have your child complete the grammar and math mysteries as a review of 1st grade. We will review summer work together on their first day of school.

Feel free to email me at vbotelho@st.lukesri.org with any questions or concerns. Have an awesome and safe summer. See you in 2nd Grade!!!!!!

Best,
Mrs. Botelho

MY SUMMER REVIEW



NAME: _____

Name: _____

Date: _____

SUMMER ABC ORDER



Directions: Put the words into alphabetical order.

1.	
2.	
3.	
4.	
5.	
6.	
7.	
8.	
9.	
10.	

lemonade

float

swim

ball

pool


water

summer

splash

party

fun



Name: _____

Date: _____




SHORT or LONG VOWEL?



short vowel



long vowel



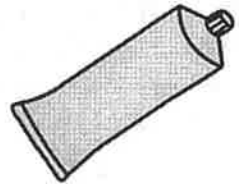
crab



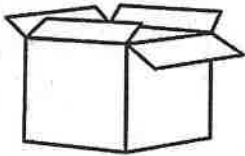
cone



nut




tube




box



log




snake



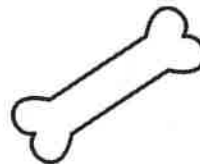
sheep




hose



pig



bone



can



ice



music



gift



dive




Name: _____

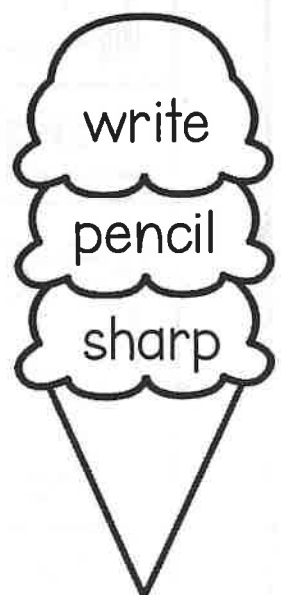
Date: _____

YUMMY WORDS



Directions: Color the words according to the key below.


nouns	verbs	adjectives
		



Name: _____

Date: _____

SINGULAR and PLURAL NOUNS



















Directions: Color the nouns according to the key below.



singular noun



plural noun




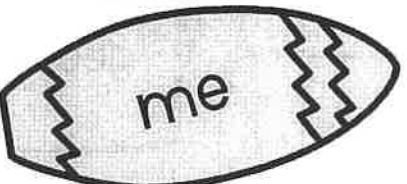








Name: _____

Date: _____

Pronoun Surfing




Directions: Read the nouns and draw a line to match them with the correct pronouns.



Name: _____

Date: _____



contraction shells


Directions: Write the correct contraction from the words in the shells.

<p>we are</p>	<p>it is</p>	<p>do not</p>	<p>who is</p>
<p>I am</p>	<p>will not</p>	<p>we will</p>	<p>he had</p>
<p>should have</p>	<p>she is</p>	<p>how did</p>	<p>they have</p>
	<p>that will</p>	<p>is not</p>	<p>I have</p>

Name: _____

Date: _____

SUMMER Punctuation



Directions: Add the correct punctuation marks to the sentences. Use a period, exclamation mark, or question mark.


1. When will we go the beach ____
2. Hey ____ Can you pass the beach ball ____
3. I want a chocolate ice cream ____
4. Watch out ____ The waves are coming ____
5. I'm really scared of crabs and sharks ____
6. Do you like to swim at the beach or in a pool ____
7. The lemonade is sweet ____
8. John, don't touch that ____
9. The fish ate the bait ____
10. Can we go fishing at the beach ____



Name: _____

Date: _____

Sentence REPAIR



Directions: Rewrite the sentences by fixing the spelling, grammar, and punctuation.

1. mom is go to the grocery store

2. the dog bark at me

3. what is your brothers name

4. dad bought mee a kite

5. are u goin swimming today

6. I will eet a piece uv cake later

7. can i please have some juice

8. whin is you birthday


Name: _____

Date: _____

READING Comprehension

Directions: Read the passage and answer the questions.

Billy is going on beach trip with his family. He is bringing his new surfboard and sunglasses. Billy's dad taught him how to swim. He is excited to swim with his sister and brother. His mom packs snacks and drinks every time they go to the beach. His favorite place is at the beach. He loves the sand and the waves.



1. Where is Billy going?

2. Who taught Billy to swim?

3. What does Billy's mom do every beach trip?

4. What is Billy excited to do with his siblings?

5. What is Billy bringing on his trip?



THE CASE OF THE TRICKY TEACHER










Word Problems

At Tale Town Elementary School, the mystery of the silly tricks in the classroom has been driving everyone crazy. Who could be doing this? Of course, the teachers have denied it. But someone with access to the classrooms has to be behind it, right?

Since the first day back at school, there's a new trick waiting for everyone every day. Sometimes it's a silly poster on the board, a broken bell, or a chair that's turned upside down. But no one knows who is doing it or why. Please help!

Instructions: Solve the math questions and eliminate each box image that contains a matching answer. The last tile image left uncrossed on the page is the mystery solution

WHICH teacher is behind the classroom tricks?

 <p>Sir Shark</p> <p>4</p>	 <p>Mr. Grizzly</p> <p>5</p>	 <p>Miss Kitkat</p> <p>15</p>	 <p>Mr. Bark</p> <p>1</p>	 <p>Professor Squeak</p> <p>11</p>
 <p>Mr. Tabby</p> <p>12</p>	 <p>Ms. Fox</p> <p>22</p>	 <p>Mr. Roar</p> <p>20</p>	 <p>Mr. Wolf</p> <p>26</p>	 <p>Hooty</p> <p>3</p>

There were 20 pencils and 15 crayons. How many more pencils are there than crayons?

Lola found 8 paintbrushes in the art room. Mr. Gordon said there should be a total of 11 paintbrushes. How many paintbrushes were missing? _____

There were 7 books on the shelf and Yasmin added 6 more books to the shelf. Then a student borrowed 2 books. How many books were left on the shelf? _____

Last week, Jye came into the library and borrowed 15 books. This week he returned 9 books and borrowed 6 more. How many books is Jye keeping at home? _____

At lunch time, the cafeteria received 25 orders for pies, but the kitchen only made 24 pies. How many orders are missed? _____

On the school's soccer team, there are 10 players, 1 goal keeper, and 4 bench players. How many players are there on the team? _____

Arla ordered 25 costumes for the dance show. However, 5 costumes shrunk and cannot be used. How many costumes are left? _____

There are 23 students in Ms. Grumpy's class. Ms. Grumpy ordered 30 pencils for her students, but 3 of them arrived broken. After she gives her students 1 pencil each, how many pencils are left? _____

Mr. Wolf had 28 pairs of scissors. A group of students borrowed 9 pairs for a project, but only returned 7 pairs. How many pairs of scissors does Mr. Wolf have left? _____



The CASE OF THE BOOK BURGLAR

Missing Addends

The school book burglar was a mystery to the students and staff of Tale Town Elementary school. No one knew who they were or what their motive was. Every day, several books would go missing from the library or classroom. The school board had tried everything to catch the thief, but they were always one step ahead. A brilliant detective is needed to discover the Book Burglar!

Instructions: Solve the math questions and eliminate each box image that contains a matching answer. The last tile image left uncrossed on the page is the mystery solution

WHO is the Book Burglar?

 <p>Mini Bot</p> <p>6</p>	 <p>Pepper Pig</p> <p>14</p>	 <p>Nancy the Knight</p> <p>9</p>	 <p>Billy Bear</p> <p>8</p>	 <p>Principal Plum</p> <p>1</p>
 <p>Rocky the Raccoon</p> <p>10</p>	 <p>Tim the Troll</p> <p>12</p>	 <p>Professor Crank</p> <p>2</p>	 <p>Professor Snail</p> <p>17</p>	 <p>Hooty</p> <p>5</p>
 <p>Marissa the Pirate</p> <p>15</p>	 <p>Fred the Frog Prince</p> <p>0</p>	 <p>Yasmin the Librarian</p> <p>11</p>	 <p>The Sneaky Squirrel</p> <p>7</p>	 <p>Mr. Wolf</p> <p>19</p>

Fill in the missing numbers.

$6 + \underline{\quad} = 20$

$19 + \underline{\quad} = 20$

$15 + \underline{\quad} = 20$

$3 + \underline{\quad} = 20$

$5 + \underline{\quad} = 20$

$14 + \underline{\quad} = 20$

$11 + \underline{\quad} = 20$

$8 + \underline{\quad} = 20$

$1 + \underline{\quad} = 20$

$18 + \underline{\quad} = 20$

$9 + \underline{\quad} = 20$

$10 + \underline{\quad} = 20$

$20 + \underline{\quad} = 20$

$12 + \underline{\quad} = 20$













THE CASE OF THE CAFETERIA CHAOS

Word Problems

In the case of the Cafeteria Chaos, the culprit was still at large. But, unfortunately, the police had no clues as to who could have done such a thing at Mathhattan Elementary School. Their only evidence was a video of the incident, which showed a figure in a black cloak sneaking into the kitchen and wreaking havoc. Food was left everywhere, and the criminal broke several kitchen appliances. So, Detective, the school needs your help. Who is the one that caused this disaster?

Instructions: Solve the math questions and eliminate each box image that contains a matching answer. The last tile image left uncrossed on the page is the mystery solution

WHO is the cafeteria chaos criminal?

 <p><u>Professor Crank</u></p> <p>18</p>	 <p><u>Gretel</u></p> <p>2</p>	 <p><u>Mr. Wolf</u></p> <p>9</p>	 <p><u>Dan the Dragon</u></p> <p>16</p>	 <p><u>Flynn the Fairy</u></p> <p>23</p>
 <p><u>Tim the Troll</u></p> <p>19</p>	 <p><u>Billy Bear</u></p> <p>14</p>	 <p><u>Boogie Blob</u></p> <p>15</p>	 <p><u>Kenny Kingsman</u></p> <p>10</p>	 <p><u>Goldilocks</u></p> <p>2</p>

There are 35 orders for burgers. 12 of those burgers are cooked and ready to be served. How many burgers still need to be made? _____

Mr. Roar opened a box of muffins and 2 fell on the floor. The box says there are a total of 12 muffins inside. How many muffins stayed in the box? _____

Olivia bought 12 cookies at the cafeteria. She gave 10 cookies to her friends. How many cookies does Olivia have left? _____

In Professor Crank's class, 9 students bought their lunch from the cafeteria today. There are a total of 25 students in her class. How many of them did not buy their lunch from the cafeteria? _____

Bella made some cupcakes for the cafeteria. She made 6 vanilla cupcakes and 8 chocolate cupcakes. How many cupcakes did Bella make in total? _____

Joe spilt a bag of fries, and a flock of birds ate all of them. The biggest bird ate 5 fries, and the other birds ate 4 fries. How many fries did Joe spill? _____

There were 30 bottles of water available for sale at the cafeteria. On a hot day, they sold 28 bottles of water. How many bottles of water are left at the cafeteria? _____

Jamie is making a yummy fruit salad. She chopped 4 apples, 3 oranges, and 8 pears to make the salad. How many pieces of fruit did Jamie use altogether? _____

This morning, the cafeteria received 10 orders for cheese pizza, 2 orders for burgers, and 6 orders for pasta. How many order did the cafeteria receive in total? _____



THE CASE OF THE SCHOOL HALLWAY HOAX
















Missing Subtrahends

The school hallway was a mess. Sometime during the night, somebody taped garbage bags to all of the lockers and splattered paint all over the floor. The mess maker painted a message on the wall, "If you think this is funny, wait until you see what I do next."

No one knew who had done this prank or why. But, the whole school was talking about it, and everyone had their own theories about who was behind it. We will need a brilliant detective to help crack this case before this prankster tries to pull off another hoax.

Instructions: Solve the math questions and eliminate each box image that contains a matching answer. The last tile image left uncrossed on the page is the mystery solution

WHO is responsible for the hallway hoax?

 Agent Sky 12	 Mr. Tabby 7	 Charlie 19	 Yasmin the Librarian 1	 Goldilocks 15
 Hooty 3	 Toto 6	 Professor Crank 17	 Georgie Porgie 5	 Mrs. Potts 10
 The Sneaky Squirrel 4	 Boogie Blob 2	 Fizzywink the Gnome 14	 Pepper Pig 11	 Rocky the Raccoon 20

Fill in the missing numbers.

$20 - \underline{\quad} = 17$

$20 - \underline{\quad} = 13$

$20 - \underline{\quad} = 10$

$20 - \underline{\quad} = 9$

$20 - \underline{\quad} = 19$

$20 - \underline{\quad} = 8$

$20 - \underline{\quad} = 0$

$20 - \underline{\quad} = 14$

$20 - \underline{\quad} = 1$

$20 - \underline{\quad} = 15$

$20 - \underline{\quad} = 16$

$20 - \underline{\quad} = 3$

$20 - \underline{\quad} = 18$

$20 - \underline{\quad} = 5$



THE CASE OF THE KIDNAPPED PRINCIPAL
















Ten less/more

It was the first day back at school and everyone was in a panic. Someone kidnapped Principal Plum from Readville Elementary School! The last person to see him was Ms. Lemons. She said that he was making coffee in the staffroom. No one heard or saw anything else. But, the police found a ransom note on Principal Plum's desk. The message demanded one million dollars by the end of the school day in exchange for releasing the principal.

The board met to discuss their options and quickly realized they didn't have the money. Instead, they need a speedy and hard-working detective to help them solve who kidnapped Principal Plum!

Instructions: Solve the math questions and eliminate each box image that contains a matching answer. The last file image left uncrossed on the page is the mystery solution

WHO kidnapped Principal Plum?

 <p><u>Boogie Blob</u></p> <p>68</p>	 <p><u>Ned the Ninja</u></p> <p>36</p>	 <p><u>Bert the Wolf</u></p> <p>94</p>	 <p><u>Tim the Troll</u></p> <p>47</p>	 <p><u>Alette the Fairy</u></p> <p>26</p>
 <p><u>Dan the Dragon</u></p> <p>60</p>	 <p><u>Captain Hook</u></p> <p>6</p>	 <p><u>Agent Sky</u></p> <p>74</p>	 <p><u>Broccoli Guy</u></p> <p>35</p>	 <p><u>Mini Bot</u></p> <p>88</p>
 <p><u>Twinkles the Fairy</u></p> <p>55</p>	 <p><u>Puss in Boots</u></p> <p>71</p>	 <p><u>Unity the Unicorn</u></p> <p>27</p>	 <p><u>Fuzzy Doom</u></p> <p>40</p>	 <p><u>The Queen of Hearts</u></p> <p>51</p>

Ten less		Ten more
<input type="text"/>	37	<input type="text"/>

Ten less		Ten more
<input type="text"/>	16	<input type="text"/>

Ten less		Ten more
<input type="text"/>	84	<input type="text"/>

Ten less		Ten more
<input type="text"/>	45	<input type="text"/>

Ten less		Ten more
<input type="text"/>	61	<input type="text"/>

Ten less		Ten more
<input type="text"/>	78	<input type="text"/>

Ten less		Ten more
<input type="text"/>	50	<input type="text"/>



THE CASE OF THE TEACHER TROLL











Read & Write Time

Everyone recently returned to school after the holidays, and they were shocked to hear the news that one of the teachers at the school is not a human but a troll in disguise! But who was it? The suspects were plentiful, but no one could be sure who the troll was.

Some speculated that it was Ms. Chan, always looking for a good laugh at the expense of her students. Others thought that maybe it was Professor Crank, always grumpy and ready to snap at anyone. Or perhaps it was Mr. Gordon, always taking things too seriously? The list went on and on. So, we need a detective to narrow it down and solve who the Teacher Troll is.

Instructions: Solve the math questions and eliminate each box image that contains a matching answer. The last tile image left uncrossed on the page is the mystery solution


WHO is the teacher troll in disguise?

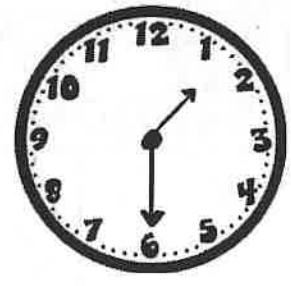
 <p><u>Professor Crank</u></p> <p>12:30</p>	 <p><u>Mr. Gordon</u></p> <p>7:30</p>	 <p><u>Yasmin the Librarian</u></p> <p>6:00</p>	 <p><u>Professor Peach</u></p> <p>10:00</p>	 <p><u>Mr. Jenkins</u></p> <p>3:00</p>
 <p><u>Sir Pengu</u></p> <p>10:30</p>	 <p><u>Mrs. Martinez</u></p> <p>1:30</p>	 <p><u>Mr. Jenkins</u></p> <p>4:00</p>	 <p><u>Ms. Chan</u></p> <p>11:30</p>	 <p><u>Professor Neigh</u></p> <p>5:30</p>





























The CASE OF THE GEMSTONE GRAB

Addition within 100

Detective! We need your help urgently! Someone grabbed some precious gemstones from the Royal Rock Museum this morning. Please help us figure out who stole the gemstones!

Instructions: Solve the math questions and look for your answers in the boxed images above the question section. Eliminate each image that contains a matching answer. After answering all questions, only one image will remain (that image will contain a number that didn't match any of your answers) and that box is the solution to that part of the mystery. There are two sections to complete to solve WHO stole the gemstones and WHERE they are hiding!

WHO took the precious gemstones from the museum?

<u>Rosina</u>  72	<u>Paul Piggles</u>  58	<u>Spiteclaw</u>  75	<u>Hooty</u>  95	<u>Cruella Deville</u>  85
<u>Mama Bear</u>  90	<u>Dan Dragon</u>  70	<u>Bert Wolf</u>  65	<u>Sheldon Shaman</u>  67	<u>Dizzy Dog</u>  35

$50 + 20 = \underline{\quad}$

$25 + 10 = \underline{\quad}$

$15 + 60 = \underline{\quad}$

$42 + 30 = \underline{\quad}$

$7 + 60 = \underline{\quad}$

$54 + 11 = \underline{\quad}$

$28 + 30 = \underline{\quad}$

$50 + 40 = \underline{\quad}$

$65 + 30 = \underline{\quad}$

WHERE is the thief hiding with the precious gemstones?

<u>Palm Beach</u>  41	<u>Shimmering Shores Lighthouse</u>  50	<u>Gnome Mines</u>  30	<u>Granny's Garden</u>  28	<u>Pat-A-Cake Bakery</u>  66
--	--	---	--	---

The thief stole 14 red gemstones, 6 green gemstones, and 10 blue gemstones. How many gemstones did the thief steal altogether? $\underline{\quad}$

The Royal Rock Museum now has only 25 red gemstones, 11 green gemstones, and 5 blue gemstones. How many gemstones does the museum have altogether? $\underline{\quad}$

Today, the Royal Rock Museum had 20 visitors in the morning, and 46 visitors in the afternoon. How many people visited the Royal Rock Museum altogether? $\underline{\quad}$

Rosina wants to buy 16 red gemstones and 34 blue gemstones. How many gemstones does Rosina want to buy altogether? $\underline{\quad}$



The CASE OF THE BACKPACK BANDIT
















Adding Multiples of Ten

Some students of Mathhattan Elementary School were shocked after the morning class session. Their backpacks, which had been neatly stacked against the wall outside their classroom, were gone!

A wave of panic and anger swept through the school as everyone tried to make sense of what had happened. Had someone broken into the school? Or was it a prank? No one could say for sure. Everyone is worried that the Backpack Bandit will strike again soon. Detective, we urgently need your help unmasking this thief!

Instructions: Solve the math questions and eliminate each box image that contains a matching answer. The last tile image left uncrossed on the page is the mystery solution

WHO is the Backpack Bandit?

 <p>Ricky Rhino</p> <p>51</p>	 <p>Tim the Troll</p> <p>89</p>	 <p>Hooty the Owl</p> <p>88</p>	 <p>Penny the Pirate</p> <p>49</p>	 <p>Puss in Boots</p> <p>74</p>
 <p>Cowboy Carl</p> <p>65</p>	 <p>The Sneaky Squirrel</p> <p>55</p>	 <p>Professor Crank</p> <p>70</p>	 <p>The Wacky Elephant</p> <p>62</p>	 <p>Rocky the Raccoon</p> <p>75</p>
 <p>Bert the Wolf</p> <p>47</p>	 <p>Nivens McTwisp</p> <p>33</p>	 <p>Harry Horse</p> <p>92</p>	 <p>Broccoli Guy</p> <p>85</p>	 <p>54</p>

$$\begin{array}{r} 23 \\ + 10 \\ \hline \end{array}$$

$$\begin{array}{r} 45 \\ + 20 \\ \hline \end{array}$$

$$\begin{array}{r} 34 \\ + 20 \\ \hline \end{array}$$

$$\begin{array}{r} 78 \\ + 10 \\ \hline \end{array}$$

$$\begin{array}{r} 12 \\ + 50 \\ \hline \end{array}$$

$$\begin{array}{r} 29 \\ + 20 \\ \hline \end{array}$$

$$\begin{array}{r} 72 \\ + 20 \\ \hline \end{array}$$

$$\begin{array}{r} 11 \\ + 40 \\ \hline \end{array}$$

$$\begin{array}{r} 35 \\ + 40 \\ \hline \end{array}$$

$$\begin{array}{r} 19 \\ + 70 \\ \hline \end{array}$$

$$\begin{array}{r} 25 \\ + 30 \\ \hline \end{array}$$

$$\begin{array}{r} 30 \\ + 40 \\ \hline \end{array}$$

$$\begin{array}{r} 17 \\ + 30 \\ \hline \end{array}$$

$$\begin{array}{r} 55 \\ + 30 \\ \hline \end{array}$$


THE CASE OF THE STOLEN PENCIL CASE





















Numbers in Words

Bernie was devastated when she realized her pencil case was missing. She had loved that case for years, and now it was gone – stolen right out of her locker! She searched through her backpack and the school building but couldn't find it anywhere.

She asked her friends if they had seen anything, but no one had. Then, the next day, Bernie found a note in her locker saying, "Haha! You'll never get your pencil case back!" This message confirmed Bernie's suspicions that her pencil case indeed was stolen! So, she is looking for a brilliant detective to help her solve this mystery.

Instructions: Solve the math questions and eliminate each box image that contains a matching answer. The last tile image left uncrossed on the page is the mystery solution

WHO stole Bernie's pencil case?

 <u>The Sneaky Squirrel</u> 23	 <u>Adam Appleby</u> 62	 <u>Bert the Wolf</u> 99	 <u>Glitters the Fairy</u> 114	 <u>Professor Crank</u> 81
 <u>Toto the Dog</u> 55	 <u>Twinkles the Penguin</u> 100	 <u>Bessy Busy Bee</u> 68	 <u>Hooty the Owl</u> 57	 <u>Wendy Darling</u> 42
 <u>Jake Jenkins</u> 18	 <u>Tim the Troll</u> 20	 <u>Mr. Tabby</u> 36	 <u>Ricky Rhino</u> 39	 <u>Mr. Fox</u> 16
 <u>Grumbles the Gremlin</u> 78	 <u>Ziggy the Alien</u> 71	 <u>Drizella</u> 60	 <u>Fred the Frog Prince</u> 45	 <u>Dan the Dragon</u> 12

Write the numeral for each number written in words.

thirty-six _____ twelve _____ eighty-one _____ forty-two _____

twenty-three _____ eighteen _____ forty-five _____ fifty-seven _____

sixty-two _____ one hundred _____ seventy-eight _____ thirty-nine _____

one hundred fourteen _____ twenty _____ fifty-five _____ sixteen _____

sixty _____ ninety-nine _____ seventy-one _____



THE CASE OF THE BROKEN SCHOOL BUSES





















Comparing Numbers

It was the first day back to school after the holidays, and all the kids eagerly awaited at their bus stops. Unfortunately, however, the school buses never arrived.

Ms. Appleby soon discovered that someone had broken into the bus depot and smashed all the buses overnight. The town was frustrated and angry! Everyone was trying to figure out who could have done such a thing. We have several suspects gathered; however, we need a brilliant detective to help figure out which one is responsible for these broken buses.

Instructions: Solve the math questions and eliminate each box image that contains a matching answer. The last tile image left uncrossed on the page is the mystery solution

WHO broke the school buses?

 <p>Hooty the Owl</p> <p>21</p>	 <p>Cowboy Carl</p> <p>43</p>	 <p>Ned the Ninja</p> <p>33</p>	 <p>Cowgirl Carlotta</p> <p>70</p>	 <p>Ms. Fox</p> <p>24</p>
 <p>Boogie Blob</p> <p>100</p>	 <p>Puss in Boots</p> <p>36</p>	 <p>Tim the Troll</p> <p>80</p>	 <p>The Wacky Elephant</p> <p>92</p>	 <p>Rocky the Raccoon</p> <p>99</p>
 <p>Bert the Wolf</p> <p>45</p>	 <p>Mini Bot</p> <p>67</p>	 <p>Robin Hood</p> <p>57</p>	 <p>Broccoli Guy</p> <p>96</p>	 <p>Super Squirrel</p> <p>85</p>
 <p>Mathnick the Geometron</p> <p>73</p>	 <p>Bluey Boo</p> <p>14</p>	 <p>Penny the Pirate</p> <p>32</p>	 <p>Ryoko the Dragon</p> <p>50</p>	 <p>Jacob the Brave</p> <p>90</p>

Circle the greater number out of each set of boxed numbers. Use your circled number to match and eliminate the characters.

67 or 32	73 or 90	21 or 14	32 or 24
92 or 99	33 or 24	70 or 80	57 or 45
73 or 70	39 or 43	96 or 92	77 or 85
14 or 24	65 or 70	45 or 28	36 or 32
11 or 14	20 or 50	92 or 100	

FRECKLE JUICE

Name _____



Freckle Juice

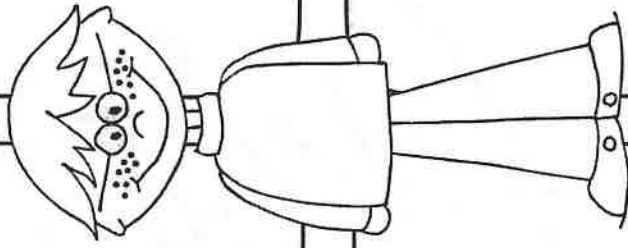
Plot: Made up of important events and the problem and solution.

Characters

Setting

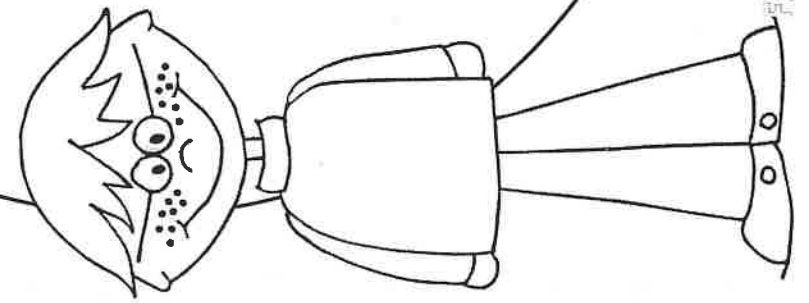
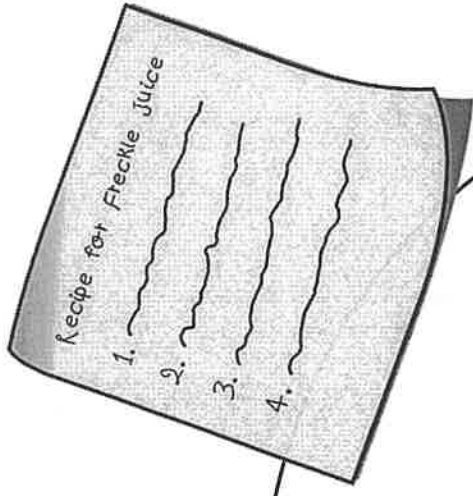
Problem

Solution

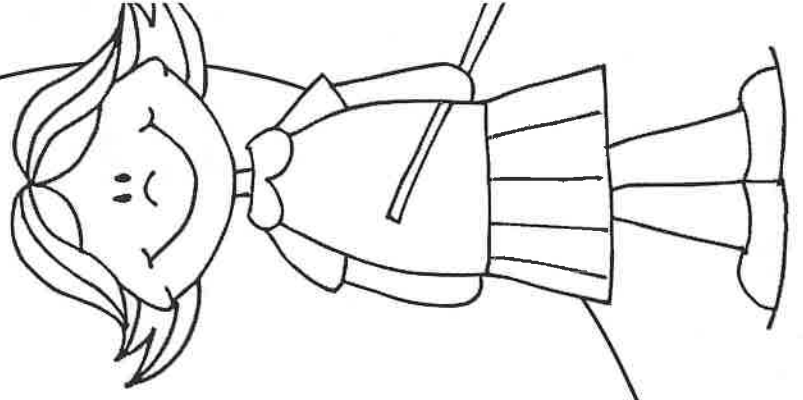


Freckle Juice

Compare & Contrast the two characters.



Andrew



Sharon

MY FAVORITE PART

