

Welcome to Second Grade!

My name is Mrs. Botelho, and I'm looking forward to being your child's teacher. This summer before entering 2nd grade I would like your child to read *Freckle Juice* by Judy Blume. After reading the book, please have your child complete the worksheets and be ready to discuss their favorite part of the book.

In addition to reading *Freckle Juice*, please have your child complete the math mysteries as a review of 1st grade. We will review summer work together on their first day of school.

Feel free to email me with any questions or concerns at [ybotelho@stlukesri.org](mailto:ybotelho@stlukesri.org).  
Have an awesome and safe summer. See you in 2nd grade!!!!

Best,

*Mrs. Botelho*  
Mrs. Botelho

## Grade 2 Supply List 2026-2027

- 2 plastic pencil boxes
- 1 package of 12 or 24 (nothing larger than 24) Crayola Twistables Crayons
- 6 large Elmer's glue sticks (1.27 oz)
- 1 pair of Scissors
- 2 Pink erasers
- 4 count of **fine point** dry erase markers
- 2 **YELLOW** highlighters
- 1 12 package of **YELLOW** Ticonderoga #2 Pencils **SHARPENED**
- 1 plastic clipboard
- 1 8 by 10 inch whiteboard and Eraser
- 6 durable 2 pocket folders (1 red, 1 orange, 1 yellow, 1 green, 1 blue, 1 purple)
- 1 inch white binder
- Headphones (no earbuds)
- 1 4 pack Play Doh (assorted colors)
- 1 3 pack of baby wipes
- Tissues (Multipacks preferred)

# FRECKLE JUICE

Name \_\_\_\_\_



# Freckle Juice

Plot: Made up of important events and the problem and solution.

Somebody:

---

---

---

---

Wanted:

---

---

---

---

But:

---

---

---

---

So:

---

---

---

---

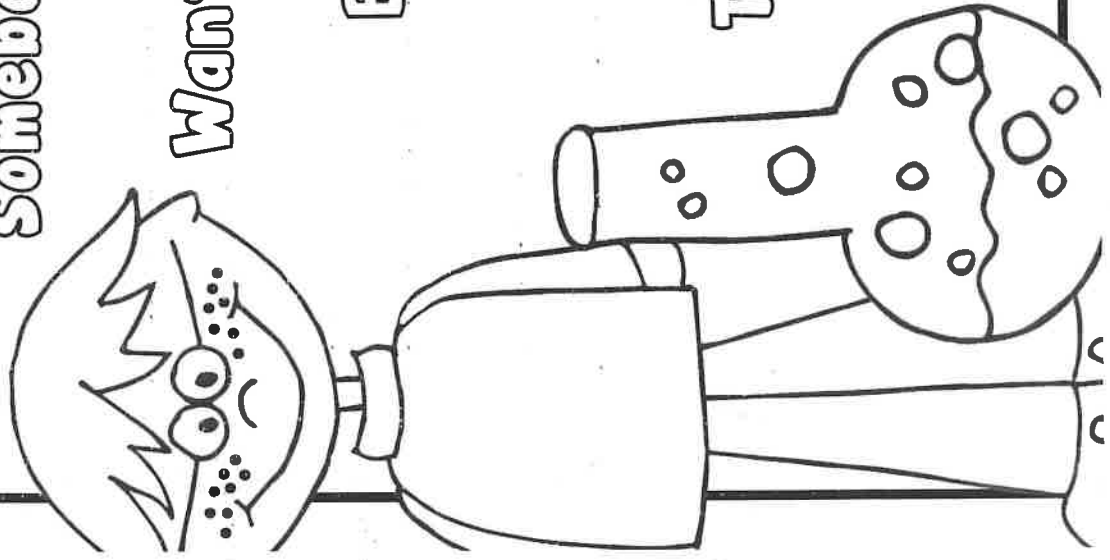
Then:

---



---

---

---



# MY FAVORITE PART





# THE CASE OF THE BEACH BANDIT













Addition within 20

Hi Detective, a bandit is going around the beach stealing peoples' towels, bags, hats, and valuables! Many folks are sad to find out that their belongings are disappearing after going for a swim. Help us figure out who is the Beach Bandit!

**Instructions:** Solve the math questions and look for your answers in the box images. Eliminate each box image that contains a matching answer. After answering all questions, only one image will remain (that image will contain a number that didn't match any of your answers) and that box is the solution to that part of the mystery.

## WHO is the Beach Bandit?

<u>Goldilocks</u>  12	<u>Little Red</u>  18	<u>Bertie the Bird</u>  15	<u>Carlos</u>  16	<u>Dash the Dog</u>  9
<u>Ned the Ninja</u>  8	<u>Hansel</u>  14	<u>Jaryaya the Troll</u>  7	<u>Penny the Pirate</u>  11	<u>Molly the Mouse</u>  10

$12 + 2 = \underline{\quad}$

$7 + 8 = \underline{\quad}$

$4 + 6 = \underline{\quad}$

$5 + 3 = \underline{\quad}$

$9 + 9 = \underline{\quad}$

$11 + 5 = \underline{\quad}$

$3 + 4 = \underline{\quad}$

$2 + 9 = \underline{\quad}$

$2 + 10 = \underline{\quad}$



## WHERE is the thief hiding with the stolen items?

<u>Under the Sea</u>  16	<u>Shimmering Shores Lighthouse</u>  11	<u>Mermaid's Grotto</u>  15	<u>The Tallest Coconut Tree</u>  10	<u>Freddy's Fish Shop</u>  9
--	---	---	--	--

The Beach Bandit stole 4 red towels and 5 blue towels. How many towels did the Beach Bandit steal altogether?  $\underline{\quad}$

The Beach Bandit stole 10 bags in the morning, and another 6 bags in the afternoon. How many bags did the Beach Bandit steal that day altogether?  $\underline{\quad}$

Today, there were 8 lifeguards on duty in the morning, and 3 more lifeguards came to help in the afternoon. How many lifeguards were on duty during the afternoon?  $\underline{\quad}$

Suzie Sunshine reported that the Beach Bandit stole 4 orange hats and 6 yellow hats. How many hats did Suzie Sunshine report stolen altogether?  $\underline{\quad}$









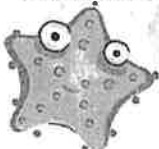



# THE CASE OF THE ICKY ICE-CREAM

Subtraction within 20

Hi Detective, someone keeps breaking into my Ice-Cream shop, adding yucky ingredients to make my ice-cream taste icky! All of my customers are complaining. The icky ice-cream is going to ruin my business. Please help me find out who is doing this to my ice-cream shop!

**Instructions:** Solve the math questions and look for your answers in the box images. Eliminate each box image that contains a matching answer. After answering all questions, only one image will remain (that image will contain a number that didn't match any of your answers) and that box is the solution to that part of the mystery.

## WHO is making the Ice-Cream Icky?

<u>Ricky the Robot</u>  16	<u>Molly the Monster</u>  5	<u>Chuck the Groundhog</u>  7	<u>Crumpet the Crab</u>  9	<u>Sydney the Seagull</u>  0
<u>Samuel the Lifeguard</u>  8	<u>Sophie the Starfish</u>  3	<u>Hooty the Owl</u>  17	<u>Pepe</u>  11	<u>Dan the Dragon</u>  10

$16 - 6 = \underline{\quad}$

$4 - 1 = \underline{\quad}$

$11 - 3 = \underline{\quad}$

$17 - 1 = \underline{\quad}$


$20 - 3 = \underline{\quad}$

$8 - 8 = \underline{\quad}$

$10 - 5 = \underline{\quad}$

$14 - 7 = \underline{\quad}$

$13 - 4 = \underline{\quad}$



## WHERE is the Icky Ice-Cream Culprit hiding?

<u>Barnacle Beach</u>  4	<u>On a small boat</u>  5	<u>Popcorn Stand</u>  10	<u>The Pizza Shop</u>  2	<u>Freddy's Fish Shop</u>  3
--	---	--	---	--

The Icky Ice-Cream culprit put 7 drops of goo and 10 drops of stink juice into the ice-cream mix. How many more drops of stink juice was put in than drops of goo?  $\underline{\quad}$

Ronnie purchased two-scoops of ice-cream and Linda purchased four-scoops of ice-cream. How many more scoops of ice-cream did Linda purchase than Ronnie?  $\underline{\quad}$

Dylan purchased a scoop of strawberry ice-cream and a scoop of chocolate ice-cream. It cost \$5 altogether. If Dylan gave a \$10 note to pay for the ice-cream, how much change should he receive?  $\underline{\quad}$

There are 18 pieces of smelly seaweed in the vanilla ice-cream. Ivan managed to find and remove 8 pieces of the seaweed. How many pieces of smelly seaweed are left in the ice-cream?  $\underline{\quad}$



## THE CASE OF THE WISHING WATERMELON











Adding Three Numbers

**Psst, Detective, I have a secret and a serious problem. I was meant to be guarding the amazing Wishing Watermelon that grants real wishes during the summer. I was exhausted and fell asleep on duty. When I woke up, the Wishing Watermelon was gone! Please help me find it before it's too late. Wishes in the wrong hands can cause chaos!**



**Instructions:** Solve the math questions and look for your answers in the box images. Eliminate each box image that contains a matching answer. After answering all questions, only one image will remain (that image will contain a number that didn't match any of your answers) and that box is the solution to that part of the mystery.

### WHO took the Wishing Watermelon?






<u>Dan the Dragon</u>  10	<u>Crumpet the Crab</u>  13	<u>Cinderella</u>  7	<u>Toto The Dog</u>  14	<u>Bert the Big Bad Wolf</u>  15
<u>Captain Perquin</u>  8	<u>Sydney the Seagull</u>  6	<u>Doc the Dwarf</u>  16	<u>Ursula</u>  17	<u>Samuel the Lifeguard</u>  12

$4 + 1 + 3 = \underline{\quad}$        $5 + 2 + 5 = \underline{\quad}$        $3 + 3 + 1 = \underline{\quad}$        $7 + 0 + 3 = \underline{\quad}$

$9 + 4 + 1 = \underline{\quad}$        $8 + 2 + 6 = \underline{\quad}$        $4 + 7 + 2 = \underline{\quad}$        $2 + 2 + 2 = \underline{\quad}$

$8 + 5 + 4 = \underline{\quad}$

### WHERE will you find the thief with the Wishing Watermelon?

<u>Barnacle Beach</u>  12	<u>Flightless Folly Ship</u>  13	<u>Shimmering Shores Lighthouse</u>  10	<u>Marvel Museum</u>  8	<u>Cave of Mirrors</u>  3
---	--	---	--	---

The you find 3 footprints going north, 5 footprints going west, and 2 footprints going east. How many footprints do you find altogether?  $\underline{\quad}$

As you inspect the crime scene, you find 3 watermelon seeds on the floor, 9 watermelon seeds on the table, and 1 watermelon seed on the door knob. How many watermelon seeds do you find altogether?  $\underline{\quad}$

You searched for clues for 2 hours in the morning, 4 hours in the afternoon, and 2 hours in the evening. How many hours did you spend searching for clues in total?  $\underline{\quad}$

You interview 4 witnesses that say they have seen nothing, another 5 witnesses said that they saw something strange, and another 3 witnesses who don't know what you are talking about. How many witnesses have you interviewed in total?  $\underline{\quad}$







# THE CASE OF THE SANDCASTLE SMASHER

Missing Addends to 10

It was a glorious summer's day at Sandy Shores Beach. That was until someone nasty decided to sneak around and smash the beautiful sandcastles that so many people worked hard to build! It won't be long before the Sandcastle Smasher strikes again to ruin someone's sandcastle masterpiece. Detective, help us put a stop to this once and for all!

**Instructions:** Solve the math questions and look for your answers in the box images. Eliminate each box image that contains a matching answer. After answering all questions, only one image will remain (that image will contain a number that didn't match any of your answers) and that box is the solution to that part of the mystery.

## WHO is the Sandcastle Smasher?

<u>Baby Bear</u>  10	<u>Pelican Pete</u>  8	<u>Rumpelstiltskin</u>  2	<u>Sally the Seal</u>  3	<u>Dude the Surfer Dog</u>  9
<u>Crumpet the Crab</u>  6	<u>Fiona the Fairy Godmother</u>  1	<u>Ned the Ninja</u>  4	<u>Hooty the Owl</u>  7	<u>Mittens the Cat</u>  5

$6 + \underline{\quad} = 10$

$\underline{\quad} + 1 = 10$

$5 + \underline{\quad} = 10$

$\underline{\quad} + 0 = 10$

$9 + \underline{\quad} = 10$

$\underline{\quad} + 8 = 10$






$3 + \underline{\quad} = 10$

$4 + \underline{\quad} = 10$

$7 + \underline{\quad} = 10$



## WHERE is the Sandcastle Smasher Hiding?

<u>Wattle Wharf</u>  4	<u>Flightless Folly Ship</u>  5	<u>Surfboard Shop</u>  6	<u>Shimmering Shores Lighthouse</u>  2	<u>Freddy's Fish Shop</u>  3
--	---	--	---	--

There are 10 kids at the beach building sandcastles. 7 of them built small sandcastles, the rest made big sandcastles. How many kids made big sandcastles? \_\_\_\_\_

Sandy has 5 buckets. 3 of them are blue. The rest of the buckets are red. How many red buckets does Sandy have? \_\_\_\_\_

There were 10 beautiful sandcastles made this afternoon along the beach. In the first hour, 4 of them were smashed. Then the Sandcastle Smasher returned in the evening to smash the rest. How many sandcastles were smashed in the evening? \_\_\_\_\_

Jude dug 8 holes in the sand. 4 of the holes are big, the rest are small. How many small holes did Jude dig? \_\_\_\_\_













The CASE OF THE BOAT BURGLARY

Numbers in Words

Bastian usually docks his brilliant boat at Wattle Wharf. He takes it out daily to sail across the sea. Sadly, sometime during the night, a burglar stole Bastian's boat! No one has reported seeing it anywhere! Bastian is super sad about the boat burglary. We need your help, Detective, to solve who the Boat Burglar is and where they are hiding with Bastian's boat.

Instructions: Solve the math questions and look for your answers in the box images. Eliminate each box image that contains a matching answer. After answering all questions, only one image will remain (that image will contain a number that didn't match any of your answers) and that box is the solution to that part of the mystery.

WHO is the Boat Burglar?

<p><u>Rumpelstiltskin</u></p>  <p>16</p>	<p><u>Ned the Ninja</u></p>  <p>30</p>	<p><u>Little Red</u></p>  <p>22</p>	<p><u>Penny the Pirate</u></p>  <p>21</p>	<p><u>Polly the Parrot</u></p>  <p>9</p>
<p><u>Mikey the Mouse</u></p>  <p>25</p>	<p><u>Captain Hook</u></p>  <p>24</p>	<p><u>Dan the Dragon</u></p>  <p>7</p>	<p><u>Paul Piggles</u></p>  <p>15</p>	<p><u>Tommy the Pirate</u></p>  <p>12</p>

Write the numeral for each number written in words.

twenty-two \_\_\_\_\_

fifteen \_\_\_\_\_

nine \_\_\_\_\_

twenty-five \_\_\_\_\_

twelve \_\_\_\_\_

sixteen \_\_\_\_\_











thirty \_\_\_\_\_

twenty-four \_\_\_\_\_

seven \_\_\_\_\_



WHERE is the burglar hiding with the boat?

<p><u>Wattle Wharf</u></p>  <p>33</p>	<p><u>Coconut Island</u></p>  <p>17</p>	<p><u>Turtle Shores</u></p>  <p>28</p>	<p><u>Paradise Bay</u></p>  <p>36</p>	<p><u>Tale Town's Docks</u></p>  <p>35</p>
<p><u>Mermaid's Grotto</u></p>  <p>41</p>	<p><u>Dolphin Island</u></p>  <p>14</p>	<p><u>Shimmering Shores Lighthouse</u></p>  <p>45</p>	<p><u>Bermuda Triangle</u></p>  <p>29</p>	<p><u>Pirate Cove</u></p>  <p>50</p>

Write the numeral for each number written in words.

forty-one \_\_\_\_\_

twenty-nine \_\_\_\_\_

thirty-three \_\_\_\_\_

twenty-eight \_\_\_\_\_

fourteen \_\_\_\_\_

thirty-six \_\_\_\_\_

fifty \_\_\_\_\_

seventeen \_\_\_\_\_

forty-five \_\_\_\_\_













# THE CASE OF THE STOLEN SUNGLASSES

Place Value: Tens &amp; Ones

Suzie Sunshine reported that someone stole her expensive sunglasses! She was at Paradise Pools when she left her sunglasses on a table to swim in the large waterfall pool. Suzie stated, "After swimming, I returned to my table and instantly noticed that my sunglasses were no longer next to my towel! I spent hundreds of dollars on those sunglasses. Please, I need the help of a detective to solve this crime."

**Instructions:** Solve the math questions and look for your answers in the box images. Eliminate each box image that contains a matching answer. After answering all questions, only one image will remain (that image will contain a number that didn't match any of your answers) and that box is the solution to that part of the mystery.

## WHO stole Suzie's Sunglasses?

<u>Little Red</u>  17	<u>Aaron</u>  16	<u>Mikey the Mouse</u>  18	<u>Dash the Dog</u>  12	<u>Bert the Big Bad Wolf</u>  14
<u>Sleepy the Dwarf</u>  19	<u>Polly the Parrot</u>  13	<u>Marvin the Monster</u>  10	<u>Moana</u>  15	<u>Crumpet the Crab</u>  11

1 ten + 2 ones = \_\_\_\_\_

1 ten + 5 ones = \_\_\_\_\_

1 ten + 3 ones = \_\_\_\_\_

1 tens + 4 ones = \_\_\_\_\_

1 ten + 0 ones = \_\_\_\_\_

1 ten + 9 ones = \_\_\_\_\_

1 ten + 1 one = \_\_\_\_\_

1 ten + 6 ones = \_\_\_\_\_

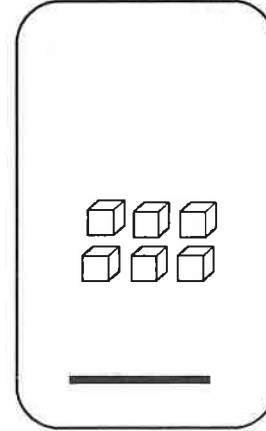
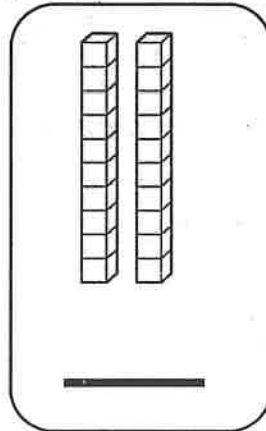
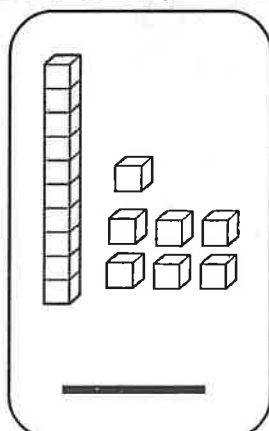
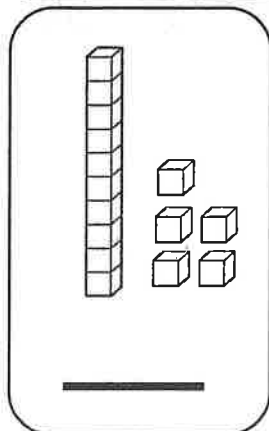
1 ten + 8 ones = \_\_\_\_\_




## WHERE is the thief hiding Suzie's Sunglasses?

<u>The Happy Hotel</u>  6	<u>Ice-Cream Truck</u>  17	<u>Lemonade Truck</u>  16	<u>The Grand Resort</u>  15	<u>The Pizza Shop</u>  20
--	---	--	---	--

Write the numeral represented by the place value models















# THE CASE OF THE FLIP-FLOP FRENZY

Adding Multiples of Ten

Detective, we need your help urgently! Someone has gone silly and is going around the beach, breaking everyone's flip-flops! Many swimmers and surfers have reported returning to their belongings to find that someone broke their flip-flops and left them behind in pieces. "Who would do such a wild thing?" asked Moana, who is one of the victims of this Flip-Flop Frenzy. We must stop this thoughtless and destructive behavior! Please help us find the culprit behind this Flip-Flop Frenzy!

**Instructions:** Solve the math questions and look for your answers in the box images. Eliminate each box image that contains a matching answer. After answering all questions, only one image will remain (that image will contain a number that didn't match any of your answers) and that box is the solution to that part of the mystery.

## WHO is going about breaking flip-flops on the beach?

<u>Samuel the Lifeguard</u>  20	<u>Hooty the Owl</u>  100	<u>Ricky the Robot</u>  10	<u>Moana</u>  50	<u>Hansel</u>  60
<u>Dash the Dog</u>  80	<u>Crumpet the Crab</u>  70	<u>Bert the Big Bad Wolf</u>  90	<u>Sally the Seal</u>  40	<u>Marvin the Monster</u>  30

$10 + 40 = \underline{\quad}$

$20 + 20 = \underline{\quad}$

$10 + 10 = \underline{\quad}$

$10 + 0 = \underline{\quad}$

$30 + 60 = \underline{\quad}$

$20 + 10 = \underline{\quad}$











$50 + 30 = \underline{\quad}$

$30 + 30 = \underline{\quad}$

$90 + 10 = \underline{\quad}$



## WHERE will you find the culprit hiding?

<u>The Pizza Shop</u>  21	<u>Wattle Wharf</u>  31	<u>Whispering Woods</u>  42	<u>Monster Mountain</u>  26	<u>The Grand Resort</u>  68
<u>The Hot Dog Stand</u>  38	<u>The Happy Hotel</u>  57	<u>Under the Sea</u>  24	<u>The Lemonade Truck</u>  25	<u>Flightless Folly Ship</u>  41

$10 + 14 = \underline{\quad}$

$20 + 6 = \underline{\quad}$

$10 + 11 = \underline{\quad}$

$30 + 12 = \underline{\quad}$

$50 + 18 = \underline{\quad}$

$10 + 15 = \underline{\quad}$

$50 + 7 = \underline{\quad}$

$20 + 11 = \underline{\quad}$

$28 + 10 = \underline{\quad}$



# THE CASE OF THE POOL PROBLEM

Ten More or Less

Hi Detective, something super gross happened this afternoon at The Grand Resort's pool. The pool water was sparkling clean all day, when suddenly, in the afternoon, it was found with clumps of slimy green goo. The goo quickly made all of the water turn green, which freaked out all of the hotel guests. Con, the Concierge, stated, "Someone must've put the slime into the pool, we've never had such a disgusting problem. I don't know how else the slime could have gotten in the water."

**Instructions:** Solve the math questions and look for your answers in the box images. Eliminate each box image that contains a matching answer. After answering all questions, only one image will remain (that image will contain a number that didn't match any of your answers) and that box is the solution to that part of the mystery.

## WHO is responsible for this yucky pool problem?

<u>Bert the Big Bad Wolf</u>  63	<u>Marvin the Monster</u>  45	<u>Tommy the Pirate</u>  57	<u>Professor Berry</u>  94	<u>Boogie Bob</u>  39
<u>Fiona the Fairy Godmother</u>  66	<u>Dan the Dragon</u>  61	<u>Fuzzy the Monster</u>  29	<u>Dash the Dog</u>  32	<u>Tina the Turtle</u>  26

10 more than 56 = \_\_\_\_\_

10 less than 42 = \_\_\_\_\_

10 more than 35 = \_\_\_\_\_

10 less than 67 = \_\_\_\_\_

10 more than 16 = \_\_\_\_\_

10 less than 73 = \_\_\_\_\_

10 more than 51 = \_\_\_\_\_

10 less than 39 = \_\_\_\_\_

10 more than 84 = \_\_\_\_\_

## WHERE will you find the culprit hiding?

<u>The Whispering Woods</u>  64	<u>Wattle Wharf</u>  48	<u>Flightless Folly Ship</u>  47	<u>The Ice-Cream Truck</u>  91	<u>Monster Mountain</u>  46
<u>Shimmering Shores Lighthouse</u>  21	<u>Freddy's Fish Shop</u>  76	<u>The Pizza Shop</u>  33	<u>Cave of Mirrors</u>  22	<u>Barnacle Beach</u>  65

10 more than 23 = \_\_\_\_\_

10 less than 75 = \_\_\_\_\_

10 more than 11 = \_\_\_\_\_

10 less than 58 = \_\_\_\_\_

10 more than 81 = \_\_\_\_\_

10 less than 57 = \_\_\_\_\_

10 more than 36 = \_\_\_\_\_

10 less than 32 = \_\_\_\_\_

10 more than 66 = \_\_\_\_\_























# THE CASE OF THE BEACH BURGER BLUNDER

Add a one-digit number to a two-digit number (no regrouping)

Many customers are disappointed and angry with Barry's Beachside Burger Restaurant. Somehow all of the orders were mixed-up, and everyone received a burger that they didn't purchase! The complaints keep rolling in, and everyone wants a refund. Barry, the restaurant owner, is worried about his reputation. He stated, "Someone must be mixing up all of the orders. I'm not sure if it is one of the restaurant staff or an outsider. I need a detective to figure out who is behind this burger blunder."

**Instructions:** Solve the math questions and look for your answers in the box images. Eliminate each box image that contains a matching answer. After answering all questions, only one image will remain (that image will contain a number that didn't match any of your answers) and that box is the mystery solution.

## WHO is responsible for the Burger Blunder?

<u>Hooty the Owl</u>  87	<u>Ireena</u>  89	<u>Jake</u>  24	<u>Polly the Parrot</u>  46	<u>Juan</u>  38
<u>Sydney the Seagull</u>  19	<u>Charlotte</u>  45	<u>Toto the Dog</u>  58	<u>Tomita</u>  49	<u>Mikey the Mouse</u>  39
<u>Ned the Ninja</u>  17	<u>Dan the Dragon</u>  29	<u>Penny the Pirate</u>  18	<u>Lola</u>  78	<u>Mateo</u>  27
<u>Boogie Bob</u>  16	<u>Liliana</u>  23	<u>R4D4 the Robot</u>  79	<u>Little Red</u>  92	<u>Pelican Pete</u>  26

$$\begin{array}{r} 14 \\ + 2 \\ \hline \end{array}$$

$$\begin{array}{r} 21 \\ + 5 \\ \hline \end{array}$$

$$\begin{array}{r} 30 \\ + 9 \\ \hline \end{array}$$

$$\begin{array}{r} 12 \\ + 6 \\ \hline \end{array}$$

$$\begin{array}{r} 83 \\ + 4 \\ \hline \end{array}$$

$$\begin{array}{r} 44 \\ + 1 \\ \hline \end{array}$$

$$\begin{array}{r} 88 \\ + 1 \\ \hline \end{array}$$

$$\begin{array}{r} 10 \\ + 7 \\ \hline \end{array}$$

$$\begin{array}{r} 25 \\ + 2 \\ \hline \end{array}$$

$$\begin{array}{r} 43 \\ + 3 \\ \hline \end{array}$$

$$\begin{array}{r} 75 \\ + 4 \\ \hline \end{array}$$

$$\begin{array}{r} 90 \\ + 2 \\ \hline \end{array}$$

$$\begin{array}{r} 37 \\ + 1 \\ \hline \end{array}$$

$$\begin{array}{r} 26 \\ + 3 \\ \hline \end{array}$$



$$\begin{array}{r} 56 \\ + 2 \\ \hline \end{array}$$

$$\begin{array}{r} 47 \\ + 2 \\ \hline \end{array}$$

$$\begin{array}{r} 21 \\ + 2 \\ \hline \end{array}$$

$$\begin{array}{r} 16 \\ + 3 \\ \hline \end{array}$$

$$\begin{array}{r} 74 \\ + 4 \\ \hline \end{array}$$









**THE CASE OF THE SURFBOARD SNATCHER**

Read & Writing Time

Hi Detective, we need your help at Sandy Shores! In a couple of hours, a surfing competition will start. However, the top three contestants have reported that someone suddenly dashed past them and snatched their surfboards! Mandy, one of the victims who witnessed it, said, "I can't tell you much about the Surfboard Snatcher except that they were so fast, that I wasn't able to identify them at all! I wonder if it was even human?" Detective, we need you to solve who is the Surfboard Snatcher and where to find them before the competition starts! The three contestants are counting on you. Hurry, there isn't much time!

**Instructions:** Eliminate each box image that contains a matching answer. After answering all questions, only one image will remain (that image will contain a number that didn't match any of your answers) and that box is the solution to that part of the mystery.

**WHO is the Surfboard Snatcher?**

<p><u>Bert the Big Bad Wolf</u></p>  <p>5:00</p>	<p><u>Marvin the Monster</u></p>  <p>1:00</p>	<p><u>Hooty the Owl</u></p>  <p>3:00</p>	<p><u>R4D4 the Robot</u></p>  <p>11:00</p>	<p><u>Boogie Bob</u></p>  <p>4:00</p>
<p><u>Fiona the Fairy Godmother</u></p>  <p>2:00</p>	<p><u>Dan the Dragon</u></p>  <p>12:00</p>	<p><u>Ned the Ninja</u></p>  <p>6:00</p>	<p><u>Dash the Dog</u></p>  <p>7:00</p>	<p><u>Annie the Alien</u></p>  <p>8:00</p>

Write what time each clock shows.



:



:



:



:



:



:



:



:



:



**WHERE will you find the snatched surfboards?**

<p><u>Coconut Island</u></p>  <p>6:00</p>	<p><u>Freddy's Fish Shop</u></p>  <p>4:00</p>	<p><u>The Pizza Shop</u></p>  <p>7:00</p>	<p><u>The Surfboard Shop</u></p>  <p>10:00</p>	<p><u>The Grand Resort</u></p>  <p>9:00</p>
---	--	--	--	--



:



:



:



: